


PREVIEW 2

Design an advertisement that encourages people to move to your town or city. Include these things in your ad:

- a memorable slogan
- a map that shows where your town or city is located in your state
- an illustration and brief caption for each of the following: landscape, average weather conditions, plant life, the estimated number of people living in your town or city, jobs
- creative touches to make the ad eye-catching and attractive
- writing that has correct grammar and spelling



GEOTERMS 2

Read Sections 2.1 and 2.2. Then create an illustrated dictionary of the Geoterms by completing these tasks:

- Create a symbol or an illustration to represent each term.
- Write a definition of each term in your own words.
- Write a sentence that includes the term and the word *map*.

Geoterm and Symbol	Definition	Sentence
climate		
economic activity		
landform		
physical feature		

GEOTERMS 2

Geoterm and Symbol	Definition	Sentence
population density		
region		
thematic map		
vegetation		

READING NOTES 2

Read Section 2.3. Write one or two sentences describing the type of thematic map you read about. Then match the physical features in the Word Bank to their correct locations on the illustration. An example is done for you.

2.3 Mapping Earth's Physical Features

A world physical features map shows information about

Physical Features

Word Bank: basin bay delta gulf isthmus lake
 mountain range peninsula plain plateau river strait

READING NOTES 2

Read Section 2.4. Write one or two sentences describing the type of thematic map you read about. Then complete the list of climate zones by filling in the missing pieces. Each entry should have a key term, an icon, and a definition.


2.4 Hot, Cold, Wet, Dry: Earth's Climates

A world climate map shows information about

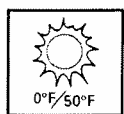
Climate Zones




ice cap: very cold all year with permanent ice and snow



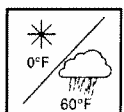
Mediterranean: warm all year with dry summers and short, rainy winters




tundra:



arid: hot and dry all year with very little rain



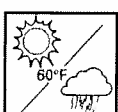
_____ : cold, snowy winters and cool, rainy summers



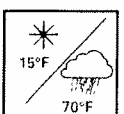
semiarid:




marine west coast: warm summers, cool winters, and rainfall all year



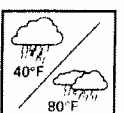
_____ : hot all year with rainy and dry seasons



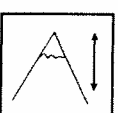
_____ : warm, rainy summers and cool, snowy winters



tropical wet:



_____ : hot, rainy summers and mild winters with some rain



highlands:

READING NOTES 2

Read Section 2.5. Write one or two sentences describing the type of thematic map you read about. Then complete the list of vegetation zones by filling in the missing pieces. Each entry should have a key term, an icon, and a definition.

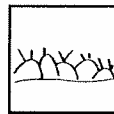
2.5 Trees and Other Plants: Earth's Vegetation

A world vegetation map shows information about


Vegetation Zones




ice cap:




_____ : small trees and bushes adapted to a Mediterranean climate



tundra: treeless plain with grasses, mosses, and scrubs adapted to a cold climate



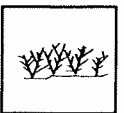
_____ : trees with broad, flat leaves that are shed before winter



desert: arid region with few plants



_____ : a mix of coniferous and deciduous trees



desert scrub:



coniferous forest:




temperate grassland:



broadleaf evergreen forest: tall trees with large leaves that remain green all year



_____ : grasses and scattered trees adapted to a tropical wet and dry climate



highlands: vegetation varies with latitude and elevation


READING NOTES 2

Read Section 2.6. Write one or two sentences describing the type of thematic map you read about. Then complete the list of population densities by filling in the missing pieces. Each entry should have a key term, an icon, and a definition.

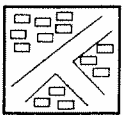
2.6 Where People Live: Population Density

A world population density map shows information about


Population Density




more than 250 people per square mile: an average of more than 250 people live in every square mile



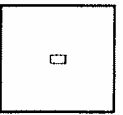
125–250 people per square mile:



_____ : an average of 25 to 125 people live in every square mile



_____ : an average of 2 to 25 people live in every square mile



fewer than 2 people per square mile:


READING NOTES 2

Read Section 2.7. Write one or two sentences describing the type of thematic map you read about. Then complete the list of economic activities by filling in the missing pieces. Each entry should have a key term, an icon, and a definition.

2.7 Economic Activity: Land and Resources

A world economic activity map shows information about

Economic Activity



hunting and gathering: people hunt animals and gather plants for their food



_____ : using trees to make homes, furniture, and paper



subsistence farming:



trade and manufacturing: buying and selling goods; turning natural resources into things to sell




_____ : farmers raise crops or livestock to sell



nomadic herding:



livestock raising:



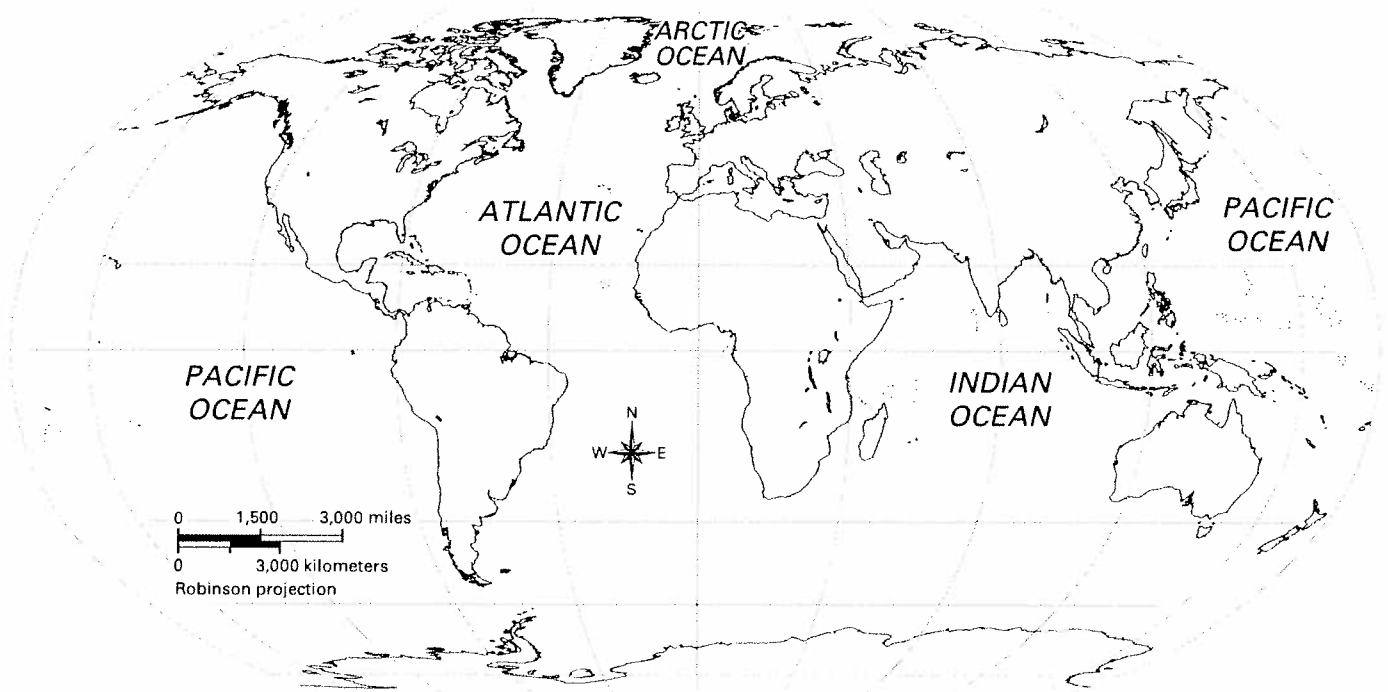
commercial fishing: catching fish in oceans, lakes, and rivers

READING NOTES 2

Read Section 2.8. Write one or two sentences describing the type of thematic map you read about. Then color and label each of the seven world regions.

2.8 Organizing Earth's Surface: Regions

A world regions map shows information about



PROCESSING 2

Create a seven-line poem about a country of your choice. Choose any country you like. Follow the format given below to write your poem. Use all six thematic maps in Chapter 2 to help you.

Line 1 Country name

Line 2 One physical feature located in your country

Line 3 Two adjectives describing your country's climate

Line 4 One detail about your country's vegetation

Line 5 Two adjectives describing your country's population density

Line 6 One detail about land use or resources in your country

Line 7 Region name

Add colorful and creative touches to decorate your poem.