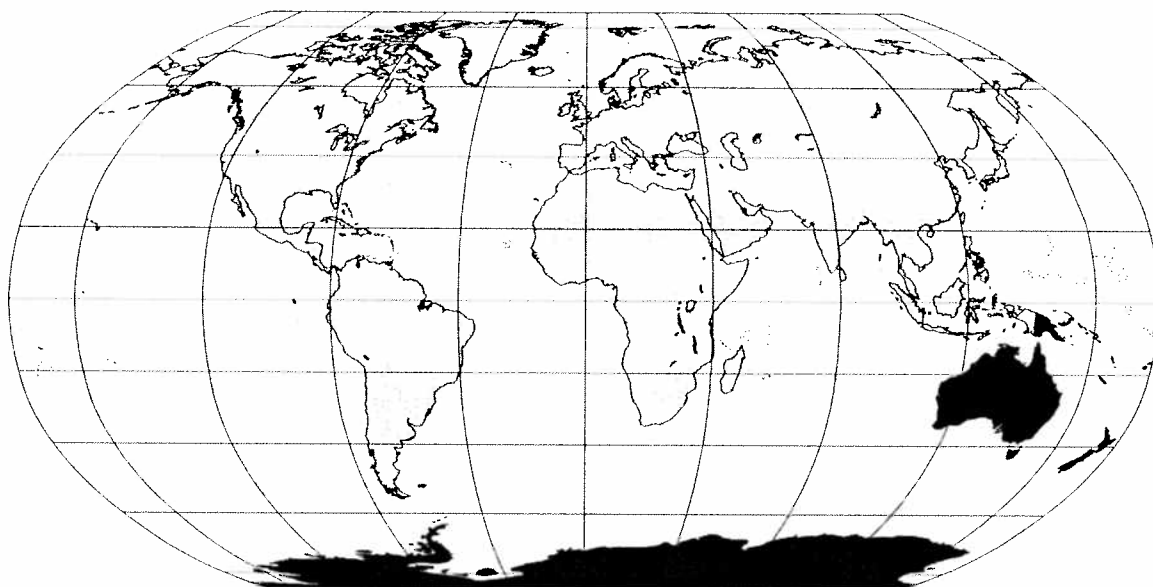


Oceania and Antarctica



Preview

Making a Mental Map of the Region

Look at the unfinished outline map of Oceania and Antarctica on the opposite page. Add a compass rose to the map, showing where north, south, east, and west are. Then draw or shade and label these features where you think they are located:

- Australia and New Zealand (draw in these missing countries)
- Antarctica (label this continent)
- the equator
- the oceans
- the areas that you think have the most population
- the areas that you think have the least population

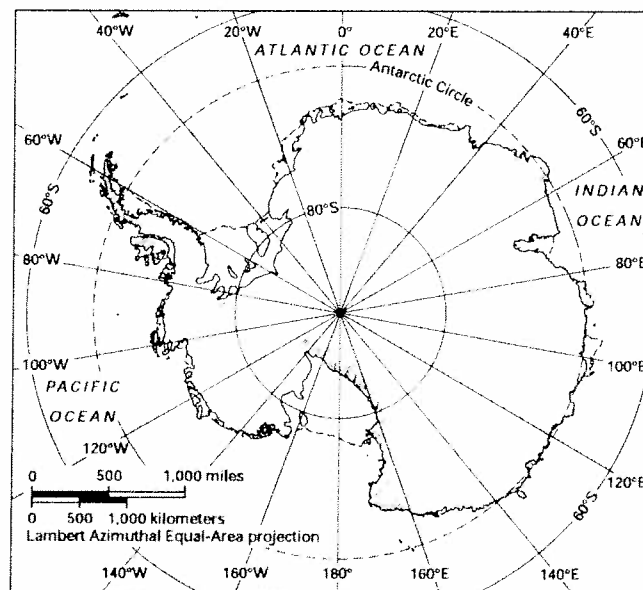
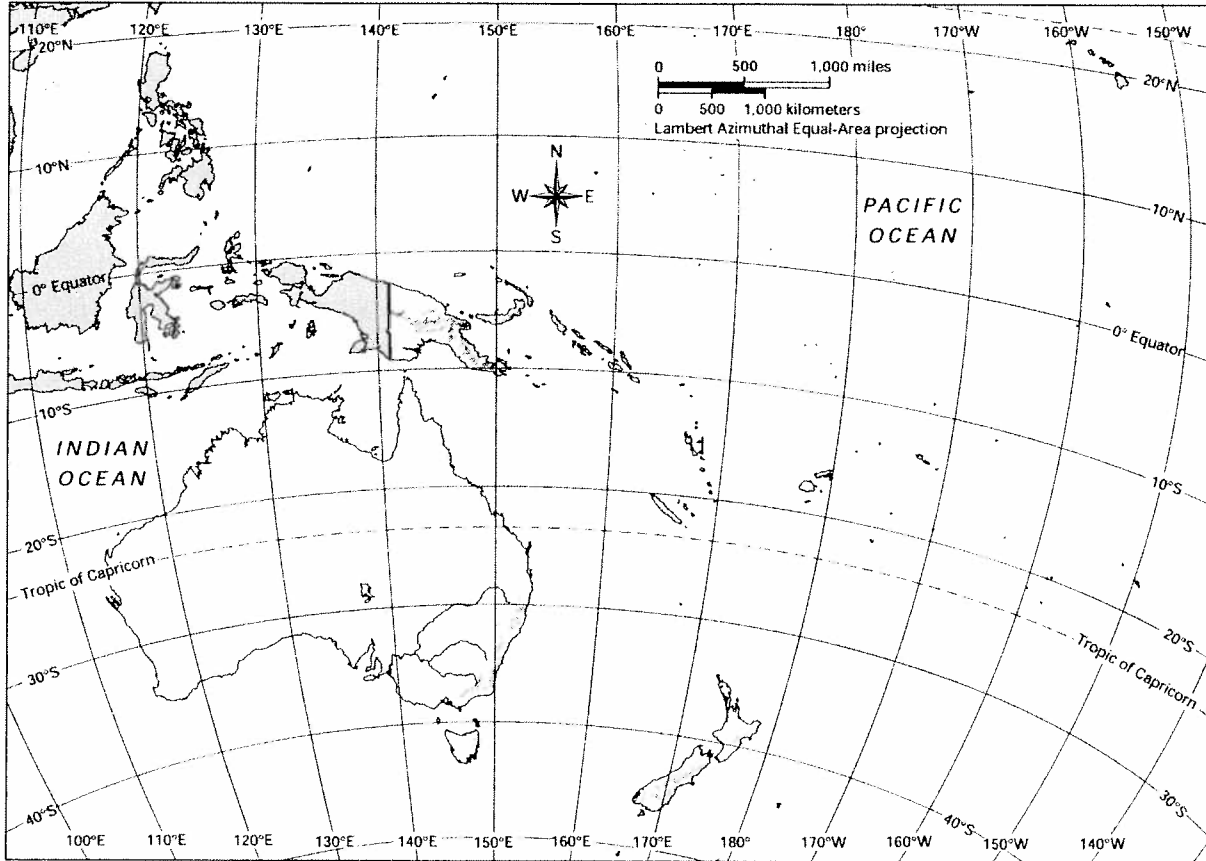
OCEANIA AND ANTARCTICA MAPPING LAB

Add details to the outline below based on your mental map of the region.

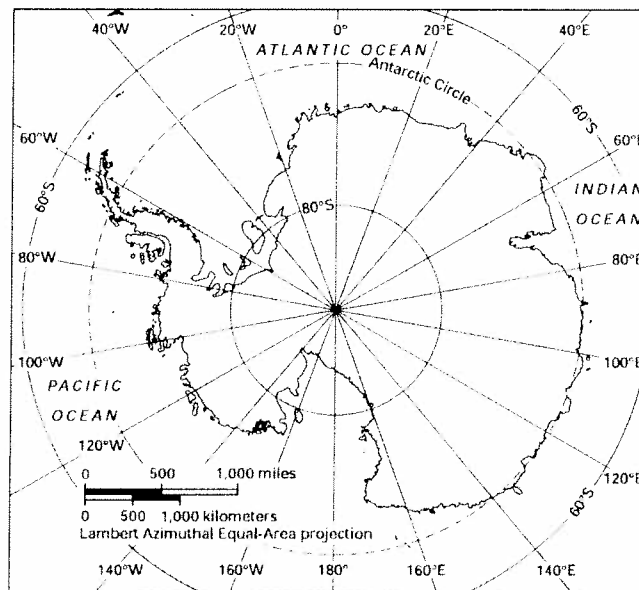
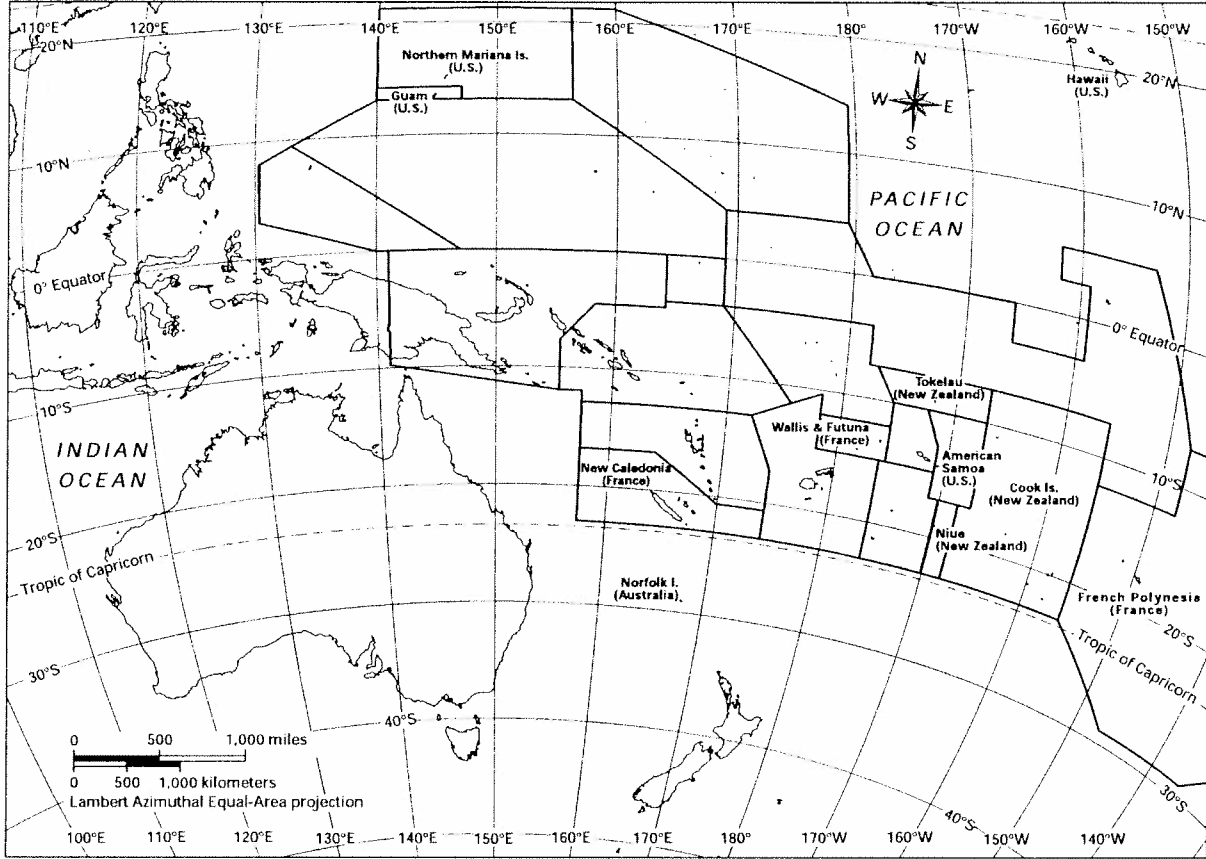


OCEANIA AND ANTARCTICA MAPPING LAB

Challenge 1 Learning About the Physical Geography of Oceania and Antarctica



Challenge 2 Learning About the Human Geography of Oceania and Antarctica



OCEANIA AND ANTARCTICA MAPPING LAB

Challenge 3 Using Geography Skills to Answer “Where?”

Question	Circle the thematic map you used. Then answer the question in complete sentences.				
1	Physical Features	Climate Zones	Vegetation Zones	Population Density	Economic Activity
2	Physical Features	Climate Zones	Vegetation Zones	Population Density	Economic Activity
3	Physical Features	Climate Zones	Vegetation Zones	Population Density	Economic Activity
4	Physical Features	Climate Zones	Vegetation Zones	Population Density	Economic Activity
5	Physical Features	Climate Zones	Vegetation Zones	Population Density	Economic Activity
6	Physical Features	Climate Zones	Vegetation Zones	Population Density	Economic Activity
7	Physical Features	Climate Zones	Vegetation Zones	Population Density	Economic Activity
8	Physical Features	Climate Zones	Vegetation Zones	Population Density	Economic Activity
9	Physical Features	Climate Zones	Vegetation Zones	Population Density	Economic Activity
10	Physical Features	Climate Zones	Vegetation Zones	Population Density	Economic Activity

OCEANIA AND ANTARCTICA MAPPING LAB

Challenge 4 Using Geography Skills to Answer “Why There?”

Question	Circle the thematic maps you used. Then answer the question in complete sentences.				
1	Physical Features	Climate Zones	Vegetation Zones	Population Density	Economic Activity
2	Physical Features	Climate Zones	Vegetation Zones	Population Density	Economic Activity
3	Physical Features	Climate Zones	Vegetation Zones	Population Density	Economic Activity
4	Physical Features	Climate Zones	Vegetation Zones	Population Density	Economic Activity
5	Physical Features	Climate Zones	Vegetation Zones	Population Density	Economic Activity
6	Physical Features	Climate Zones	Vegetation Zones	Population Density	Economic Activity

OCEANIA AND ANTARCTICA MAPPING LAB

Challenge 5

Using Maps to Analyze a Field Photograph

	Location A (32° south, 130° east)	Location B (7° north, 152° east)	Location C (37° south, 174° east)
Physical Features			
Climate Zones			
Vegetation Zones			
Population Density			
Economic Activity			

Challenge 5
Using Maps to Analyze a Field Photograph

We think the field photograph best matches Location _____ .

Supporting-Evidence Statements

1. From the _____ map, we learned that this location

_____ .

In the field photograph, we see _____

_____ .

2. From the _____ map, we learned that this location

_____ .

In the field photograph, we see _____

_____ .

3. From the _____ map, we learned that this location

_____ .

In the field photograph, we see _____

_____ .

4. From the _____ map, we learned that this location

_____ .

In the field photograph, we see _____

_____ .